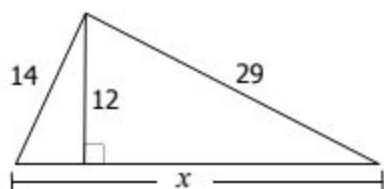
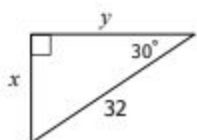


Find x .



Find x .



Find x .

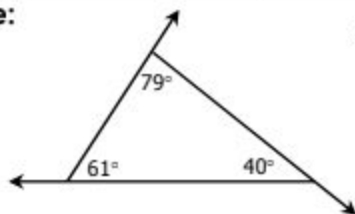
Find y .



Area: _____

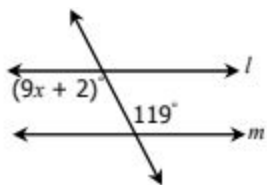
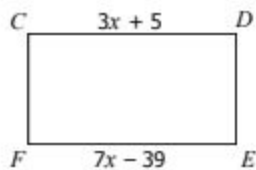
Circumference: _____

Triangle:

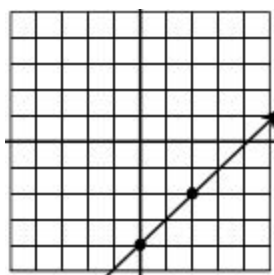


Sum of Exterior Angles:

Find EF .



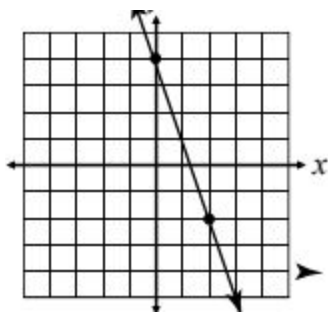
Find x .



Find the slope of the following line.

$(-7, -13)$ and $(1, -5)$ Find the slope given the following two points.

$6x + 8y = -16$ Find the slope of the following line.



Write the slope-intercept formula of the following line.